


**Time - Standard Form**


Half-hourly/Quarterly: S1

Write each time in standard form:


1) Quarter past three




2) Quarter to nine




3) Half past eight




4) Quarter past twelve



5) Quarter past seven



6) Half past five




7) Quarter to five




8) Half past eleven




9) Quarter past nine




10) Quarter to four



11) Half past six



12) Quarter to two




**Time - Standard Form**


Half-hourly/Quarterly: S1

Write each time in standard form:


1) Quarter past three

**3:15**


2) Quarter to nine

**8:45**


3) Half past eight

**8:30**

4) Quarter past twelve

**12:15**

5) Quarter past seven

**7:15**


6) Half past five

**5:30**


7) Quarter to five

**4:45**


8) Half past eleven

**11:30**


9) Quarter past nine

**9:15**


10) Quarter to four

**3:45**

11) Half past six

**6:30**

12) Quarter to two

**1:45**