

Fractions Of A Set: Spring Things

Let's practice writing fractions!

Please look at the example then complete the rest of the worksheet.


Example:

Here is a set of 3 Easter eggs.

How many Easter eggs are yellow?

1 out of a total of 3 eggs are yellow. We can write this as a fraction: 1/3

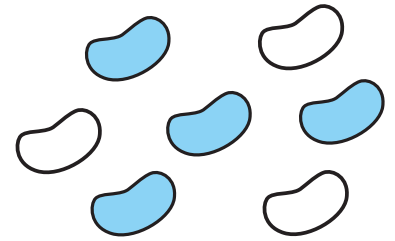
How many Easter eggs are white? 2/3



Here is a set of 7 jelly beans.

How many jelly beans are blue? _____


How many are white? _____



How many bunnies are there in all? _____ bunnies

How many are white? _____

How many are purple? _____




How many chicks are there in all? _____

How many are white? _____

How many are green? _____

How many are orange? _____



How many tulips are there in all? _____

How many are pink? _____

How many are yellow? _____

How many do not have leaves? _____

How many have leaves? _____

