





Name: _____

Birdwatching Pictograph

Pat, Jim, Linda, and Paul went on a bird watching walk.
The pictograph below shows how many birds each person saw.

Birdwatching Trip

Name	Number of Birds Seen
Pat	
Jim	
Linda	
Paul	

Each  represents 2 birds





- How many birds did Pat see? 1. _____
- How many birds did Jim see? 2. _____
- How many birds did Paul see? 3. _____
- How many more birds did Paul see than Linda? 4. _____
- How many birds did Jim and Pat see together? 5. _____
- Did Jim see an odd or even number of birds? 6. _____
- Who saw eleven birds? 7. _____
- If Jim had seen three more birds, how many symbols would be next to his name on the pictograph? 8. _____
- Who saw fewer birds: Jim or Paul? 9. _____
- Did Linda see more or less than a dozen birds? 10. _____
- Tell how you would show 4 birds on the pictograph?
11. _____
- What is the total number of birds seen by the 4 people? 12. _____

Name: _____

Birdwatching Pictograph - ANSWER KEY

Pat, Jim, Linda, and Paul went on a bird watching walk.
The pictograph below shows how many birds each person saw.

Birdwatching Trip

Name	Number of Birds Seen
Pat	 <u>12</u>
Jim	 <u>7</u>
Linda	 <u>11</u>
Paul	 <u>16</u>

Each  represents 2 birds

1. How many birds did Pat see? 1. 12 birds
2. How many birds did Jim see? 2. 7 birds
3. How many birds did Paul see? 3. 16 birds
4. How many more birds did Paul see than Linda? 4. 5 more birds
5. How many birds did Jim and Pat see together? 5. 19 birds
6. Did Jim see an odd or even number of birds? 6. odd
7. Who saw eleven birds? 7. Linda
8. If Jim had seen three more birds, how many symbols would be next to his name on the pictograph? 8. five
9. Who saw fewer birds: Jim or Paul? 9. Jim
10. Did Linda see more or less than a dozen birds? 10. less
11. Tell how you would show 4 birds on the pictograph
11. Two bird symbols represent 4 birds.
12. What is the total number of birds seen by the 4 people? 12. 46 birds